




Build the value of the coins using money blocks. Say and write the value under the coins. Write = , < , or > between the values to compare.




6 ¢





16 ¢





11 ¢




6 ¢



17 ¢

31 ¢



28

¢

>

16

¢



4

¢

<

6

¢



31

¢

>

28

¢



25 ¢

>



15 ¢



1 ¢

<



5 ¢



10 ¢


<



25 ¢




13 ¢



10 ¢



5 ¢



10 ¢