




Fill in the blanks and say the amount.

1)



.



\$ \_\_\_\_\_

.

\_\_\_\_\_

\_\_\_\_\_

2)



.



\$ \_\_\_\_\_

.

\_\_\_\_\_

\_\_\_\_\_

3)



.

\$

\_\_\_\_\_

.

\_\_\_\_\_

\_\_\_\_\_

Build using money blocks or play money and say the amount.

4) \$3.52

5) \$1.07

6) \$1.25

7) \$2.68

8) \$1.15

9) \$3.40