







Build the value of the coins using money blocks. Say and write the value under the coins. Write = , < , or > between the values to compare.

	<div style="border: 1px solid black; width: 100px; height: 100px; margin: 0 auto;"></div>	
<p>_____ ¢</p>		<p>_____ ¢</p>

	<div style="border: 1px solid black; width: 100px; height: 100px; margin: 0 auto;"></div>	
<p>_____ ¢</p>		<p>_____ ¢</p>

	<div style="border: 1px solid black; width: 100px; height: 100px; margin: 0 auto;"></div>	
<p>_____ ¢</p>		<p>_____ ¢</p>



_____ ¢



_____ ¢



_____ ¢



_____ ¢



_____ ¢



_____ ¢



_____ ¢



_____ ¢



_____ ¢



_____ ¢



_____ ¢



_____ ¢



_____ ¢



_____ ¢



_____ ¢



_____ ¢